

Ficha de Trabalho rectas

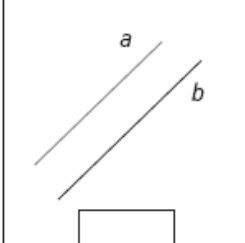
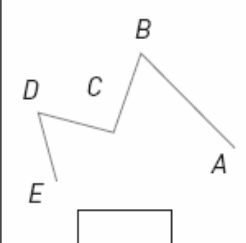
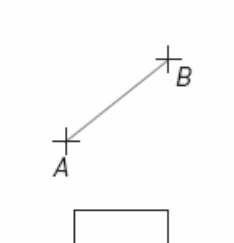
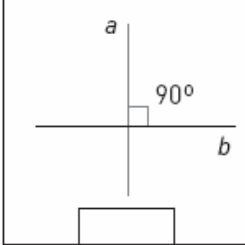
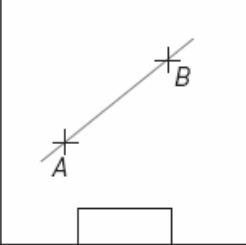
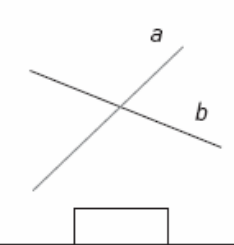
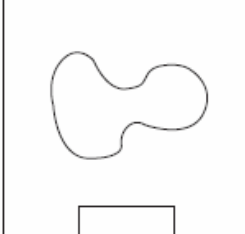
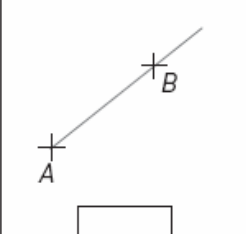
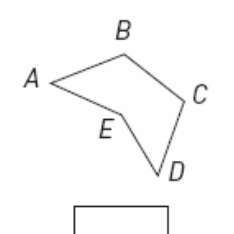
Matemática

5ºano

Nome: _____ N.º: _____ Turma: _____ / _____ / 20__

Rectas

- Completa com o número correspondente.
- 1 Segmento de recta de extremos A e B .
 - 2 Linha recta que passa pelos pontos A e B .
 - 3 Semi-recta de origem no ponto A que passa pelo ponto B .
 - 4 As linhas rectas a e b são paralelas.
 - 5 Linha curva fechada.
 - 6 As linhas rectas a e b são concorrentes oblíquas.
 - 7 Linha poligonal aberta.
 - 8 As linhas rectas a e b são concorrentes perpendiculares.
 - 9 Linha poligonal fechada.

 <input type="checkbox"/>	 <input type="checkbox"/>	 <input type="checkbox"/>
 <input type="checkbox"/>	 <input type="checkbox"/>	 <input type="checkbox"/>
 <input type="checkbox"/>	 <input type="checkbox"/>	 <input type="checkbox"/>